



Ladybird Doubles


Write the number sentence for each ladybird double.




$1 + 1 = \underline{\hspace{2cm}}$




$2 + 2 = \underline{\hspace{2cm}}$



$3 + 3 = \underline{\hspace{2cm}}$




$4 + 4 = \underline{\hspace{2cm}}$




$5 + 5 = \underline{\hspace{2cm}}$

Dice Doubles


Write the number sentence for each dice double.




+




$1 + 1 = \underline{\hspace{2cm}}$




+




$2 + 2 = \underline{\hspace{2cm}}$




+




$3 + 3 = \underline{\hspace{2cm}}$




+



$4 + 4 = \underline{\hspace{2cm}}$




+




$5 + 5 = \underline{\hspace{2cm}}$

Butterfly Doubles


Write the number sentence for each butterfly double.




$1 + 1 = \underline{\hspace{2cm}}$




$2 + 2 = \underline{\hspace{2cm}}$



$3 + 3 = \underline{\hspace{2cm}}$



$4 + 4 = \underline{\hspace{2cm}}$



$5 + 5 = \underline{\hspace{2cm}}$

Number Shape Doubles


Write the number sentence for each number shape double.




$1 + 1 = \underline{\hspace{2cm}}$




$2 + 2 = \underline{\hspace{2cm}}$



$3 + 3 = \underline{\hspace{2cm}}$



$4 + 4 = \underline{\hspace{2cm}}$



$5 + 5 = \underline{\hspace{2cm}}$